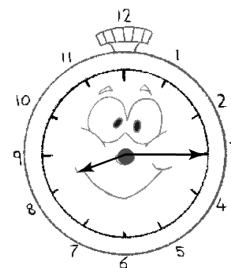
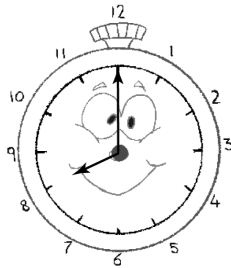


Name: \_\_\_\_\_

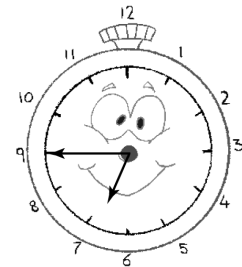
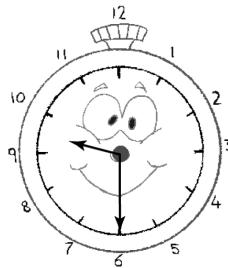
# Telling Time

Read each sentence. Draw a line to the clock that shows the same time.

1. São sete menos um quarto.



2. São nove e meia.



3. São dez horas.

4. São doze e um quarto.

5. São duas menos um quarto.

6. São doze horas.

7. São cinco e meia.

8. São oito e um quarto.

9. São oito horas.

10. São duas e meia.

